

## SNOW DAY #3

In order for this day to count as a day toward attendance, all activities must be completed and returned within 5 days of returning to school. All work will be graded and returned.

**Math-** Complete Worksheet

**Reading:**

1. Complete Worksheet
2. Read for 20 minutes \_\_\_\_\_ Parent initials

**Writing:** Complete the following prompt. Your writing should be one page long.

Snow ice cream is delicious! Come up with a spectacular recipe for this sweet treat.

**Physical Activity-** Complete 15 minutes of physical activity. \_\_\_\_\_ Parent initials



NAME \_\_\_\_\_

# MONTHLY ASSESSMENT

Solve.

- Mario did 10 jumping jacks on Tuesday.  
He did 6 on Wednesday.  
How many more jumping jacks did he do on Tuesday than on Wednesday?  
  
\_\_\_\_\_ - \_\_\_\_\_ = \_\_\_\_\_

- We go to school 5 days every week.  
We have been here 2 days this week.  
How many more days will we go to school this week?  
  
\_\_\_\_\_ days

- Are there birthdays every month? \_\_\_\_\_
- Which months have no birthdays?  
\_\_\_\_\_
- Which month has the most birthdays?  
\_\_\_\_\_

Class Birthdays

January	Lafay 1-10	Die 1-11	Shaw 1-12	Kim 1-24			
February	Margie 2-28						
March							
April	Phong 4-1	Ann 4-2	Kate 4-16	John 4-18	Cor 4-17	Kate 4-17	
May	Nadia 5-1	Hale 5-2	Maggie 5-14	Maria 5-28			
June	Faron 6-14						
July	Nadia 7-2	Andre 7-7	John 7-19	Sarah 7-14			
August	Van 8-1						
September	Min 9-9	Karla 9-16	Son 9-21				
October	Richard 10-4	Cher 10-23					
November							
December	Janis 12-2	Jul 12-30					

- In which months are there 4 birthdays? \_\_\_\_\_
- Are there birthdays on the graph in your birthday month?  
\_\_\_\_\_  
What month is your birthday? \_\_\_\_\_
- How many birthdays are in the summer? \_\_\_\_\_

# MONTHLY ASSESSMENT

Match.

1.



2.



3.



Count the money.

4.



\_\_\_\_\_ ¢, \_\_\_\_\_ ¢, \_\_\_\_\_ ¢, \_\_\_\_\_ ¢, \_\_\_\_\_ ¢, \_\_\_\_\_ ¢

5.



\_\_\_\_\_ ¢, \_\_\_\_\_ ¢, \_\_\_\_\_ ¢, \_\_\_\_\_ ¢, \_\_\_\_\_ ¢, \_\_\_\_\_ ¢, \_\_\_\_\_ ¢

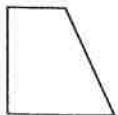

6.



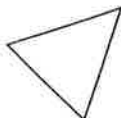
\_\_\_\_\_ ¢, \_\_\_\_\_ ¢, \_\_\_\_\_ ¢, \_\_\_\_\_ ¢, \_\_\_\_\_ ¢

Match the same shapes.

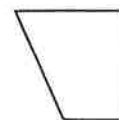
7.



8.



9.



## Words in Context

Read the story. Then write a sentence to answer each question below.



### All Gone

Once upon a time, Red made a cake for Granny. She mixed some of this and some of that, a dash of sugar, and lots of carrots. Then she popped the cake into the oven.

Red was brave to walk through the woods to Granny's that evening. As she passed the stream, she saw a wolf.

"What's in the basket, dear?" asked the wolf.

"This cake is a present for Granny," Red answered.

"Come closer. I can't hear," said the wolf. Red walked closer. In a flash, the wolf gobbled up the cake.

"You ate the whole thing!" yelled Red. "You're a greedy wolf!"

"No, I'm a hungry wolf!" he said, dashing off.

1. How much sugar is a **dash** — a little or a lot? \_\_\_\_\_

2. What did Red do that was **brave**? \_\_\_\_\_


3. Which word in the story means "went by"? \_\_\_\_\_

4. Why did Red think the wolf was **greedy**? \_\_\_\_\_



### Write Your Own

branch trail wise



5. Write a sentence using a word in the box. \_\_\_\_\_

# Word Games

Find the word in the box that matches the clue.  
Write each letter of the word on an answer blank.

branch    brave    dash    evening    greedy  
pass    present    stream    trail    wise

1. not afraid \_\_\_\_\_
2. between afternoon and night \_\_\_\_\_
3. selfish \_\_\_\_\_
4. a path \_\_\_\_\_
5. smart \_\_\_\_\_
6. to go by \_\_\_\_\_
7. a part of a tree \_\_\_\_\_
8. to move fast \_\_\_\_\_
9. when you are here \_\_\_\_\_
10. a small body of water \_\_\_\_\_

Look at the letters you wrote in the shaded column above.  
Write them on the answer blanks below to answer the riddle.

What is the biggest ant in the world?

\_\_\_\_\_

